



- **money** (The Canadian penny is no longer in circulation. It is used here to show money amounts to the cent.)

A. Write the total value of each group of coins.

1.



_____ cents

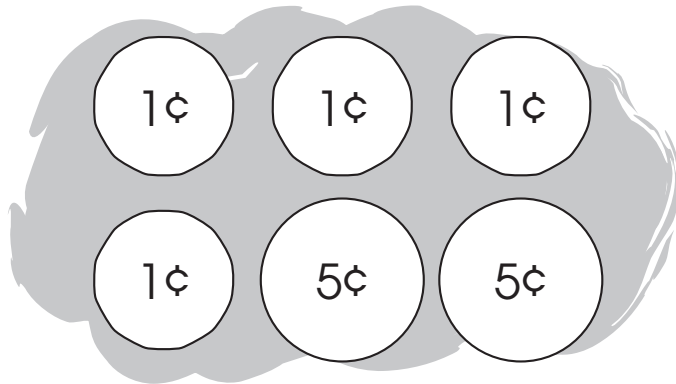
2.



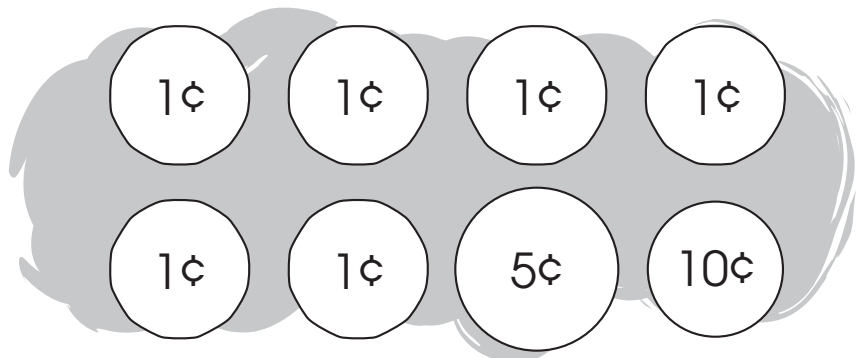
_____ cents

B. Check the correct coins to show the value of each item.

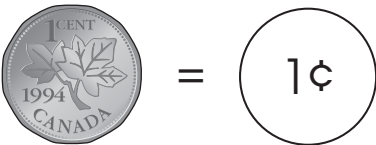
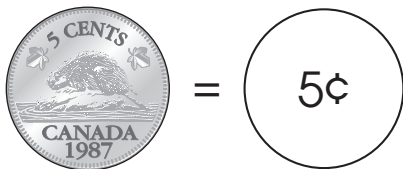
1.



2.



C. Draw the fewest coins to show each value.



1. **6** cents

2. **13** cents

3. **16** cents

4. **15** cents



- **money** (The Canadian penny is no longer in circulation. It is used here to show money amounts to the cent.)

A. Write the total value of each group of coins.

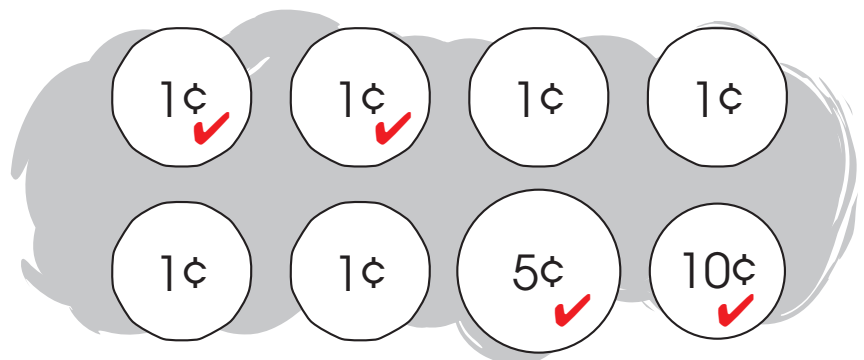
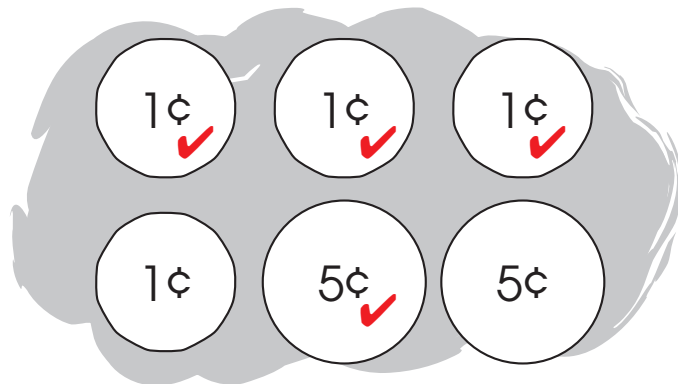


7 cents



12 cents

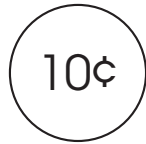
B. Check the correct coins to show the value of each item.



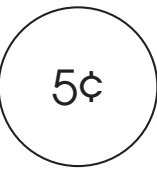
C. Draw the fewest coins to show each value.



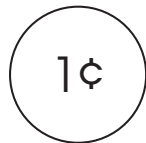
=



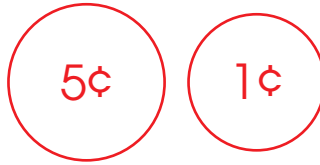
=



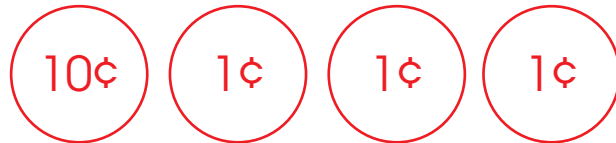
=



1. **6** cents



2. **13** cents



3. **16** cents



4. **15** cents

