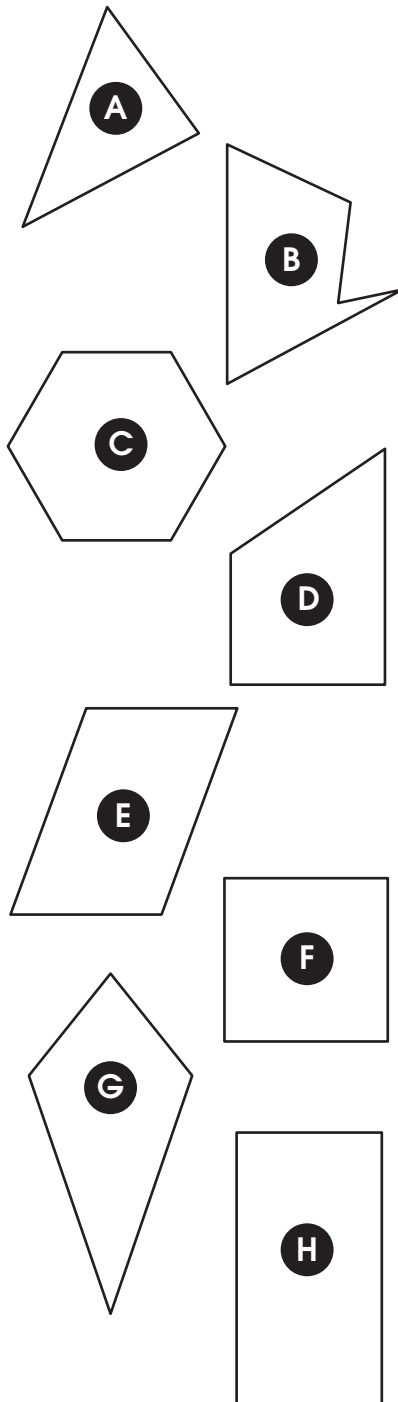




• 2-D figures

A. Look at the figures and write the letters of the figures that have each attribute.



The figure(s) that has/have

1. no parallel sides:

2. no right angles:

3. all sides the same length:

4. 2 right angles:

5. more than 1 pair of parallel sides:

6. angle(s) less than a right angle:

7. 4 right angles:

B. Name the figures in (A).

A _____

B _____

C _____

D _____

E _____

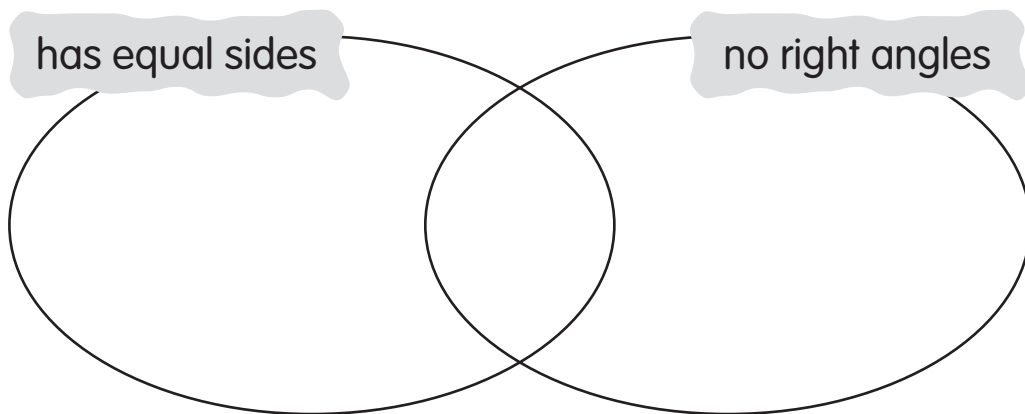
F _____

G _____

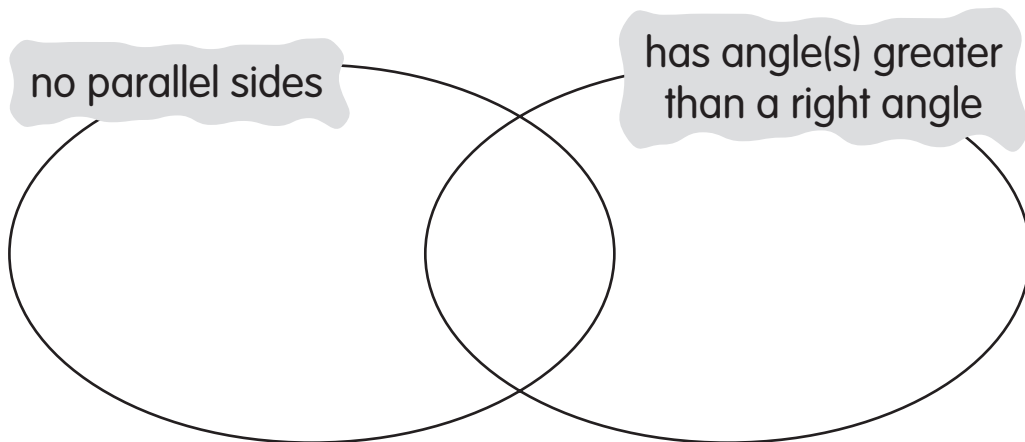
H _____

C. Sort the figures from (A) into the Venn diagrams. Write the letters.

1.



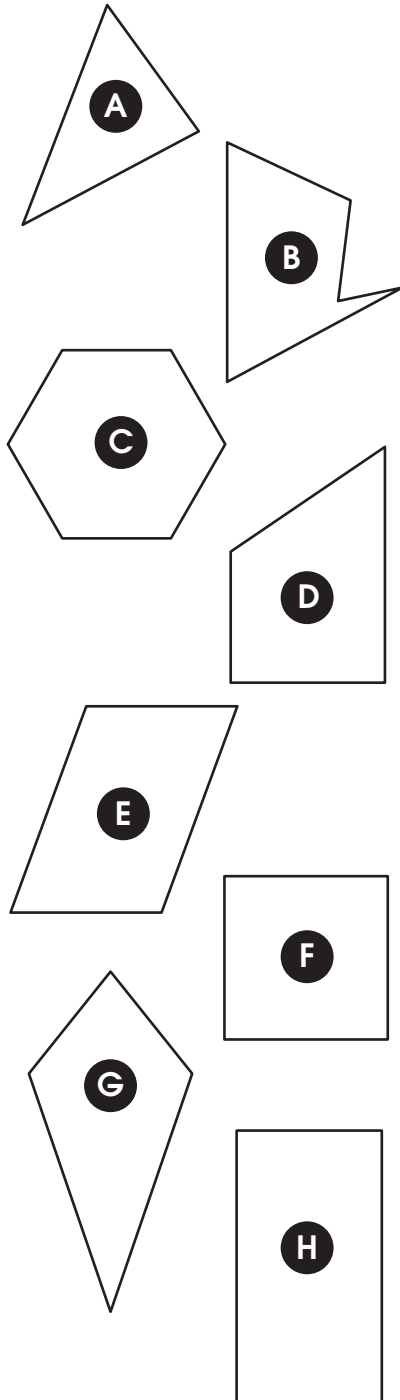
2.





• 2-D figures

A. Look at the figures and write the letters of the figures that have each attribute.



The figure(s) that has/have

1. no parallel sides:
A, B, G
2. no right angles:
A, B, C, E, G
3. all sides the same length:
C, F
4. 2 right angles:
D
5. more than 1 pair of parallel sides:
C, E, F, H
6. angle(s) less than a right angle:
A, B, D, E, G
7. 4 right angles:
F, H

B. Name the figures in (A).

A _____ triangle

B _____ pentagon

C _____ hexagon

D _____ trapezoid

E _____ parallelogram

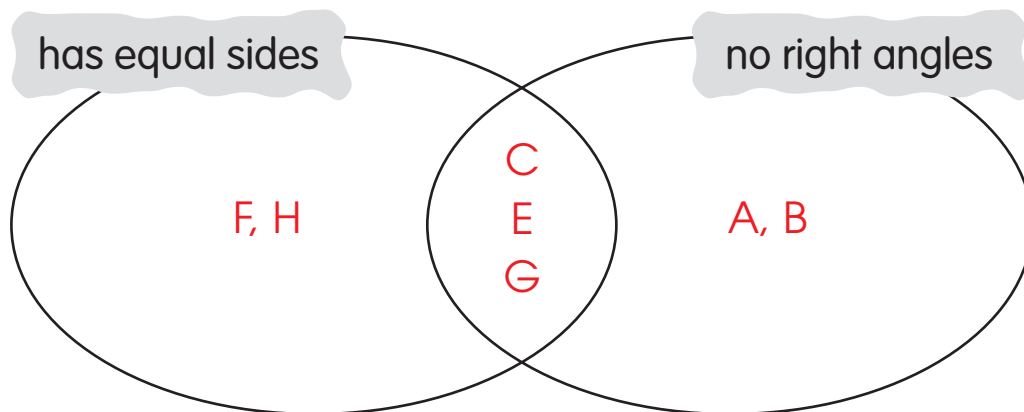
F _____ square

G _____ kite

H _____ rectangle

C. Sort the figures from (A) into the Venn diagrams. Write the letters.

1.



2.

