
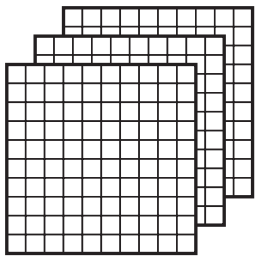




• 3-digit numbers

**A. Complete the base-ten name for each number. Then write it in numeral.**

1.



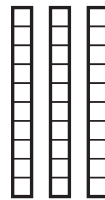
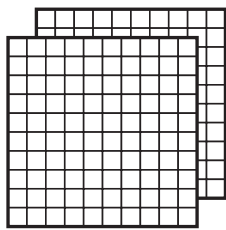
In numeral

\_\_\_ hundreds

\_\_\_ tens

\_\_\_ ones

2.



In numeral

\_\_\_ hundreds

\_\_\_ tens

\_\_\_ ones

**B. Write the numbers in numeral.**

1. 4 hundreds 2 tens 7 ones

\_\_\_\_\_

2. 3 hundreds 9 ones

\_\_\_\_\_

3. 5 hundreds 1 ten 3 ones

\_\_\_\_\_

4. 7 hundreds 2 tens

\_\_\_\_\_

5. 2 hundreds 3 tens 4 ones

\_\_\_\_\_

6. 1 hundred 5 ones

\_\_\_\_\_

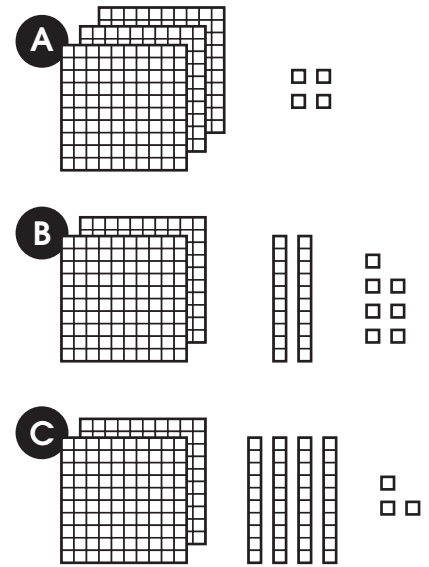


**C. Write the base-ten name for each number. Then match each number with the correct group of cubes. Write the letter.**

1. **227**

2. **304**

3. **243**



**D. Write the numbers in the place-value charts.**

1. 864

| Hundreds | Tens | Ones |
|----------|------|------|
|          |      |      |

2. 780

| Hundreds | Tens | Ones |
|----------|------|------|
|          |      |      |

3. 6 hundreds 4 ones

| Hundreds | Tens | Ones |
|----------|------|------|
|          |      |      |

4. 7 hundreds

| Hundreds | Tens | Ones |
|----------|------|------|
|          |      |      |

5. 2 hundreds 1 ten

| Hundreds | Tens | Ones |
|----------|------|------|
|          |      |      |

6. 1 hundred 5 tens 1 one



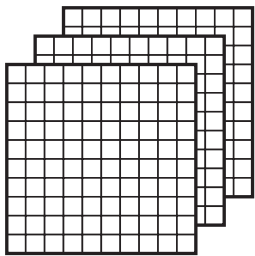
| Hundreds | Tens | Ones |
|----------|------|------|
|          |      |      |



• 3-digit numbers

**A. Complete the base-ten name for each number. Then write it in numeral.**

1.



In numeral

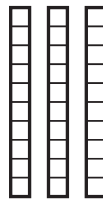
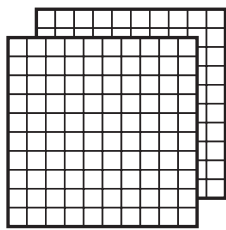
347

  3   hundreds

  4   tens

  7   ones

2.



In numeral

236

  2   hundreds

  3   tens

  6   ones

**B. Write the numbers in numeral.**

1. 4 hundreds 2 tens 7 ones

  427  

2. 3 hundreds 9 ones

  309  

3. 5 hundreds 1 ten 3 ones

  513  

4. 7 hundreds 2 tens

  720  

5. 2 hundreds 3 tens 4 ones

  234  

6. 1 hundred 5 ones

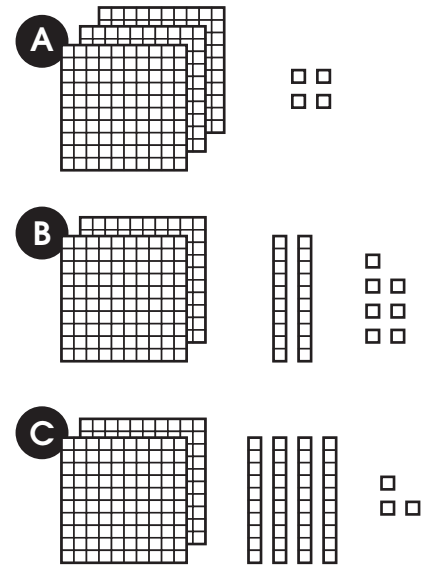
  105

**C. Write the base-ten name for each number. Then match each number with the correct group of cubes. Write the letter.**

1. **227**  
2 hundreds 2 tens 7 ones (B)

2. **304**  
3 hundreds 4 ones (A)

3. **243**  
2 hundreds 4 tens 3 ones (C)



**D. Write the numbers in the place-value charts.**

1. 864

| Hundreds | Tens | Ones |
|----------|------|------|
| 8        | 6    | 4    |

2. 780

| Hundreds | Tens | Ones |
|----------|------|------|
| 7        | 8    | 0    |

3. 6 hundreds 4 ones

| Hundreds | Tens | Ones |
|----------|------|------|
| 6        | 0    | 4    |

4. 7 hundreds

| Hundreds | Tens | Ones |
|----------|------|------|
| 7        | 0    | 0    |

5. 2 hundreds 1 ten

| Hundreds | Tens | Ones |
|----------|------|------|
| 2        | 1    | 0    |

6. 1 hundred 5 tens 1 one

| Hundreds | Tens | Ones |
|----------|------|------|
| 1        | 5    | 1    |