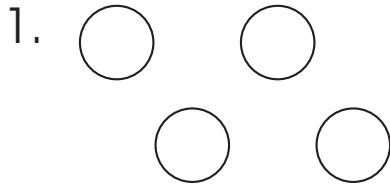


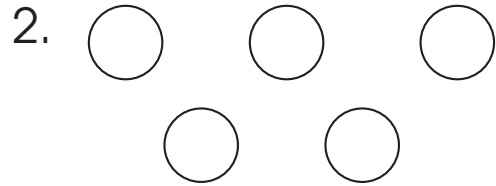


- more or less

A. Draw arrays to show more or less.

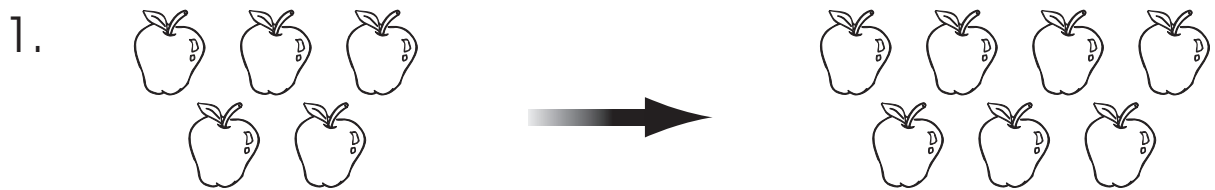


Show 2 more:



Show 1 less:

B. Check the correct sentences.




- (A) shows 2 more (B) shows 1 less




- (A) shows 2 less (B) shows 2 more

C. Draw arrays and fill in the blanks.


1. 2 more than 3 is _____ .



2. 1 less than 4 is _____ .



3. 2 less than 6 is _____ .



D. Find the answers.

1. 1 more than 3

2. 2 less than 7

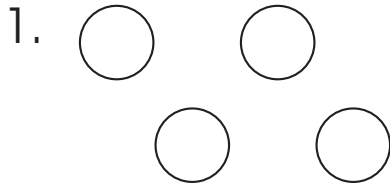


Is “3 more than 4” the same as “4 more than 3”?

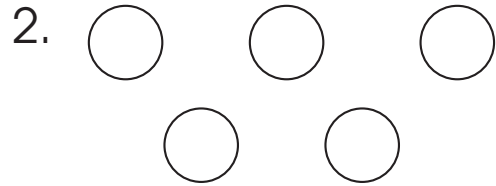



- more or less

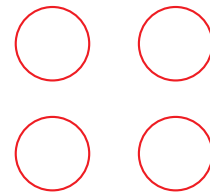
A. Draw arrays to show more or less.



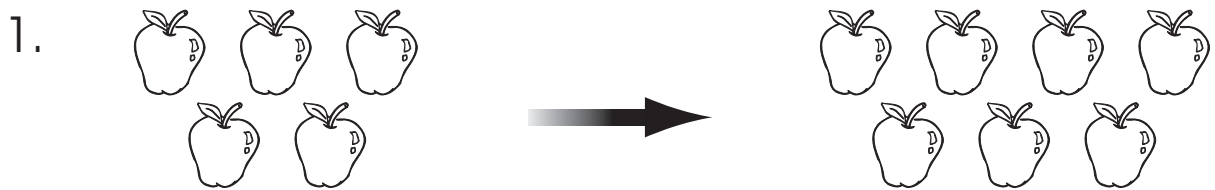
Show 2 more:



Show 1 less:



B. Check the correct sentences.



shows 2 more



shows 1 less




shows 2 less




shows 2 more

C. Draw arrays and fill in the blanks.

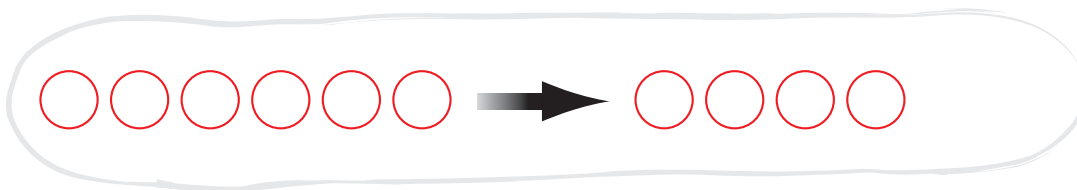
1. 2 more than 3 is 5 .



2. 1 less than 4 is 3 .



3. 2 less than 6 is 4 .



D. Find the answers.

1. 1 more than 3

4

2. 2 less than 7

5



Is “3 more than 4” the same as “4 more than 3”?

Yes