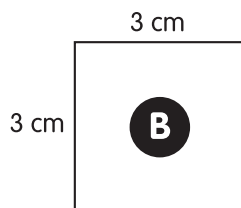
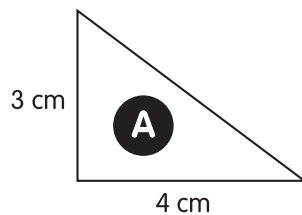


- 1** Sam can fold two paper planes in a minute. How many paper planes can Sam fold in 4 hours?

- 240  
 360  
 480  
 600


- 2** Compare the areas of the two shapes below.



Which sentence is true?

- A is larger than B by  $3 \text{ cm}^2$ .  
 B is larger than A by  $3 \text{ cm}^2$ .  
 A is larger than B by  $6 \text{ cm}^2$ .  
 B is larger than A by  $6 \text{ cm}^2$ .

- 3** Kenneth draws a ball from the bag without looking.



What is the probability of drawing a ball that is not "5"?

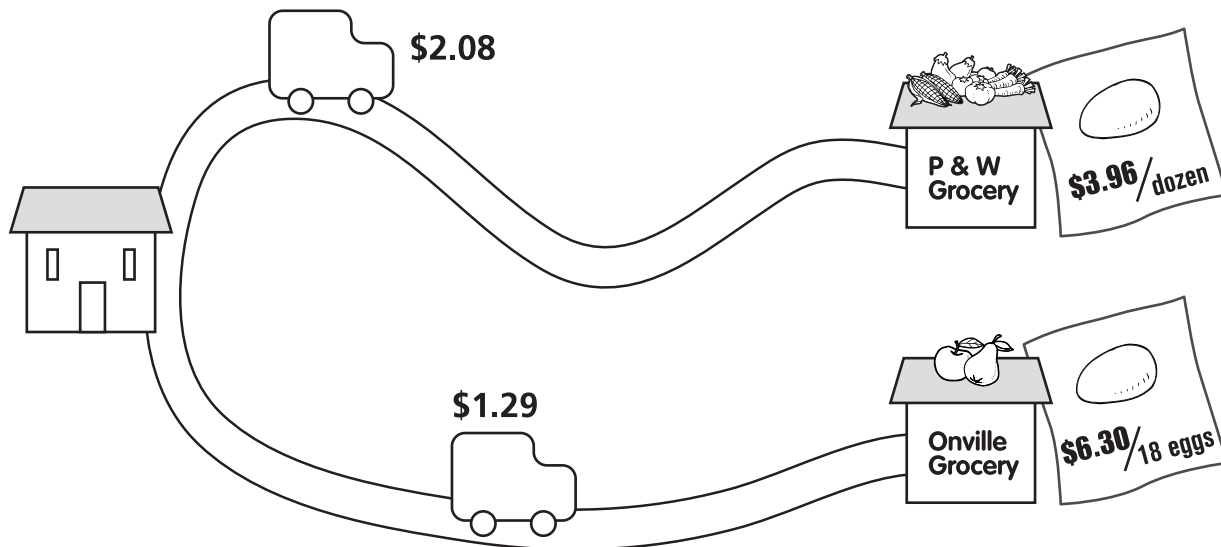
- $\frac{6}{7}$   
  $\frac{1}{5}$   
  $\frac{4}{5}$   
  $\frac{1}{7}$

- 4** What is the sum of the number sentence below?

$$\frac{999}{999} + \frac{7}{7} + 6 = ?$$

- 3  
 8  
 976  
 1012

- 11 Abby wants to buy a dozen eggs to make a birthday cake. She compares the costs of the eggs from two grocery stores and the costs of travelling to these stores.



Which store should she go to buy eggs? What is the total cost?

**Explain Your Thinking**