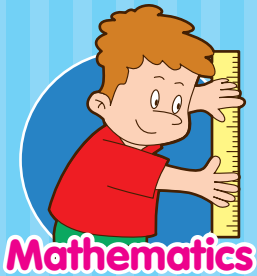


# Contents

## Grades 3-4



### Week

**1** • English • Mathematics 5  
• Science • Social Studies

**2** • English • Mathematics 19  
• Science • Social Studies

**3** • English • Mathematics 33  
• Science • Social Studies

**4** • Arts & Crafts • Comics 47  
• Fun Places to Go in Summer



## Week

**5** • English • Mathematics 55  
• Science • Social Studies

**6** • English • Mathematics 69  
• Science • Social Studies

**7** • English • Mathematics 83  
• Science • Social Studies

**8** • Arts & Crafts • Comics 97  
• Fun Places to Go in Summer

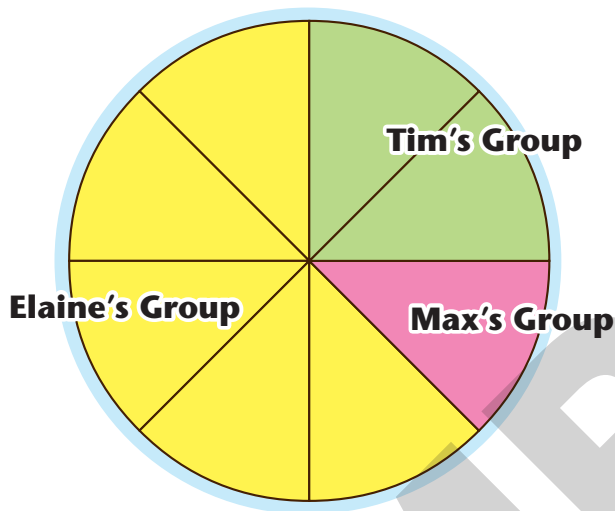
## Answers

105

C. The circle graph shows how many cans were collected by each group in Mrs. Philips's class. Read the graph and answer the questions.



### Number of Cans Collected by Each Group



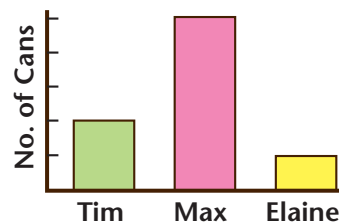
Check the bar graph that correctly shows the information on the circle graph.



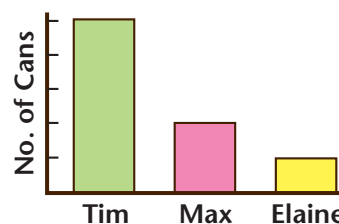
- Which group collected
  - the most cans? \_\_\_\_\_
  - the fewest cans? \_\_\_\_\_
- If Max's group collected 100 cans, how many cans did
  - Tim's group collect?  
\_\_\_\_\_ cans
  - Elaine's group collect?  
\_\_\_\_\_ cans

3.

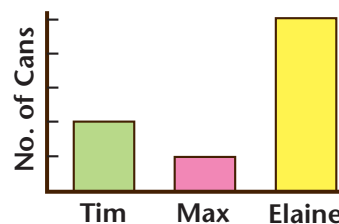
(A)



(B)



(C)



**D. Write what each person might have said.**



Julia invited her friends over for a pool party.



Julia said to her friends, "Would you like to come over for a pool party?"

1. Julia's mother said she had a surprise for all of them.

---

---

2. Julia asked her mother if they could have pizza for dinner.

---

---

3. Julia suggested making friendship bracelets for one another.

---

---



4. Julia told her mother that it was the best day ever.

---

---





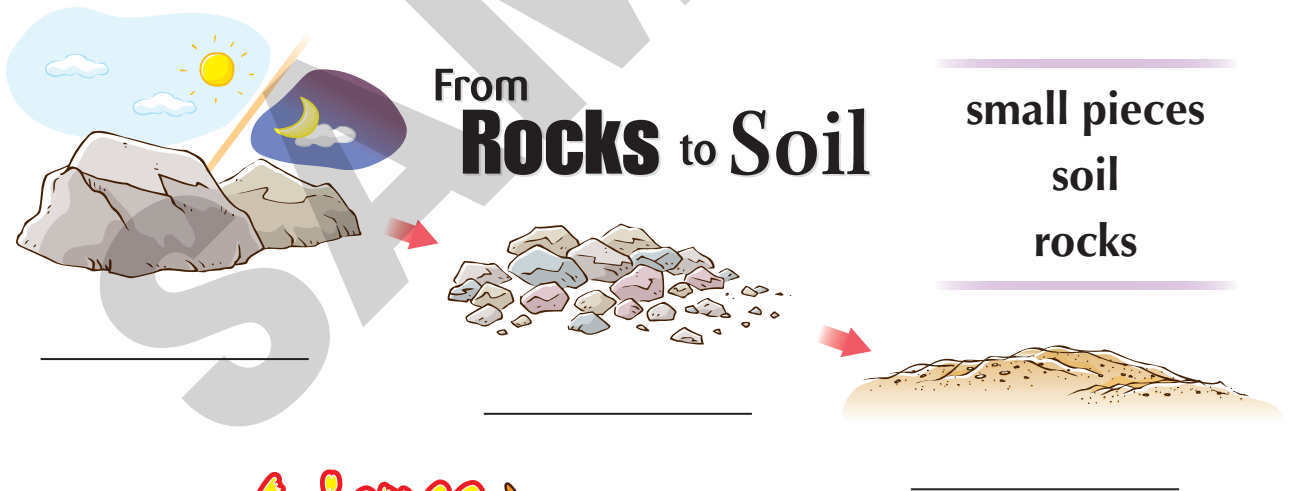
**A. Fill in the blanks to complete the paragraph. Then label the diagram.**

**bigger    crack    soil    cold**

## Weather & Soil

When the weather gets hot, rocks become 1. \_\_\_\_\_ . When the weather gets 2. \_\_\_\_\_ , rocks become smaller. If this happens often enough, the rocks will 3. \_\_\_\_\_ and break up into smaller pieces. When they get really small, they turn into 4. \_\_\_\_\_ .

*Do you know how the weather helps make soil?*



The rock in soil has been broken down over millions of years to the size of sand, or smaller. Silt is smaller than sand, and clay is even smaller!

Name the provinces and territories of Canada. Then answer the questions.

# Map of Canada

Week  
**6**



**Social Studies**

The map shows the following provinces and territories with their abbreviations and blank boxes for names:

- YT** (Yukon Territory) - Blank box
- NU** (Northwest Territories) - Blank box
- NT** (Northwest Territories) - Blank box
- MB** (Manitoba) - Blank box
- BC** (British Columbia) - Blank box
- AB** (Alberta) - Blank box
- SK** (Saskatchewan) - Blank box
- ON** (Ontario) - Blank box

Wildlife illustrations include a polar bear in the north, a grizzly bear in the west, a deer in the central provinces, and a loon in the east.